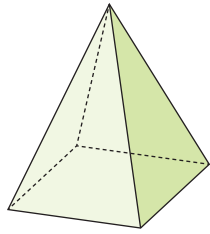
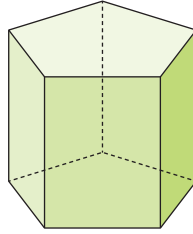


얼마나 알고 있나요

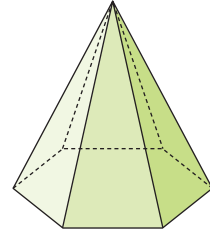
1 입체도형의 이름을 써 보세요.



()

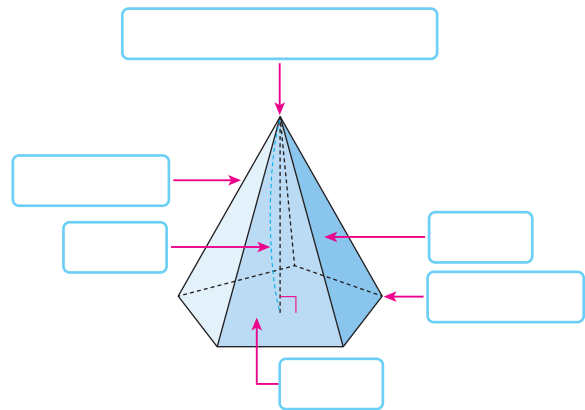
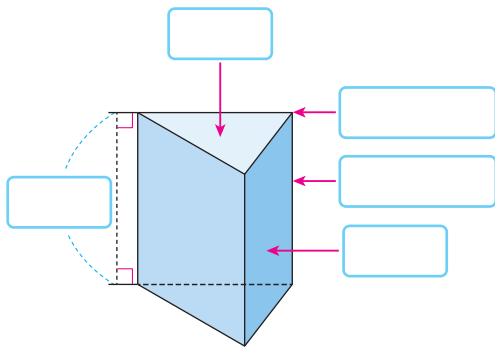


()

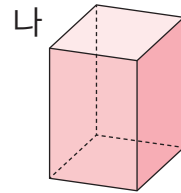
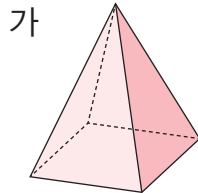


()

2 입체도형을 보고 □ 안에 알맞은 말을 써넣으세요.

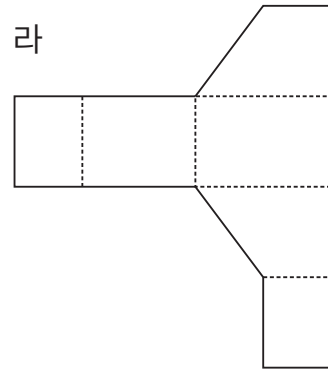
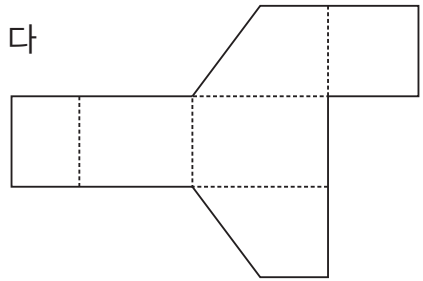
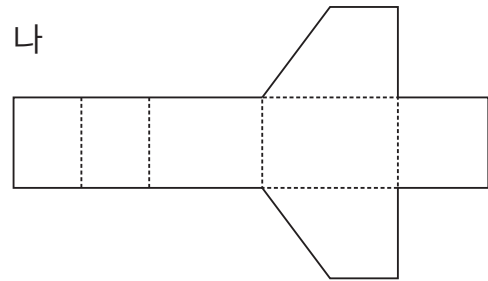
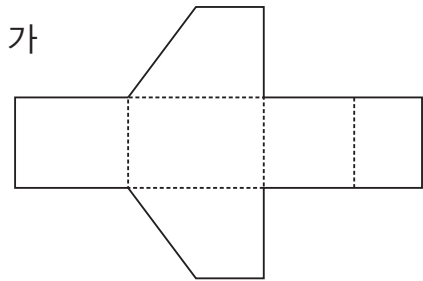
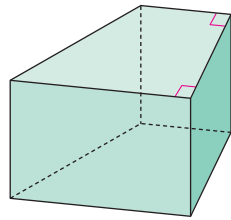


3 입체도형을 보고 옳게 말한 것은 ○표, 잘못 말한 것은 ×표 하세요.



- 가의 옆면이 삼각형입니다. ()
- 나는 모서리가 모두 10개입니다. ()
- 가와 나 밑면이 사각형입니다. ()
- 가와 나 옆면의 수가 같습니다. ()

4 다음 사각기둥의 전개도가 되는 것을 모두 찾아보세요.



()

5 전개도를 접었을 때 만들어지는 입체도형의 이름을 쓰고, 그 이유를 써 보세요.

이름 _____

이유 _____

