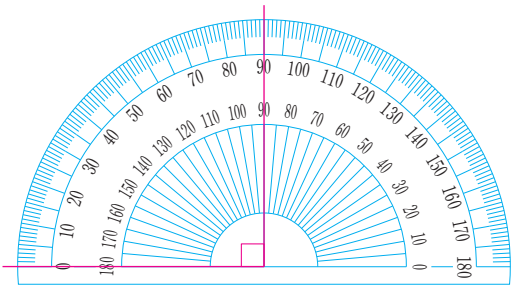
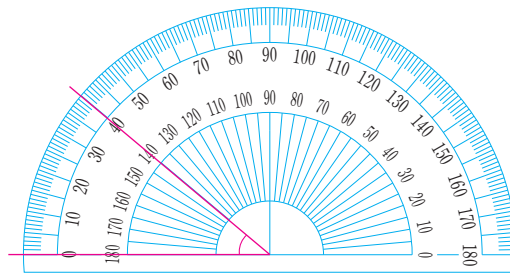
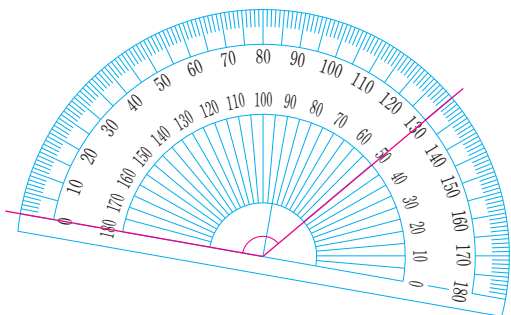
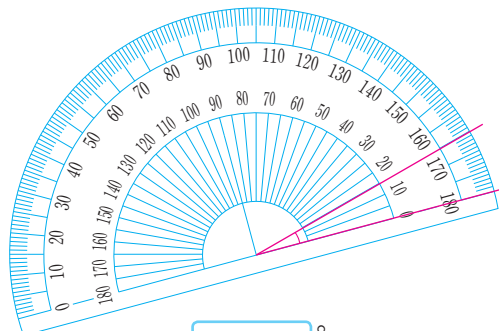


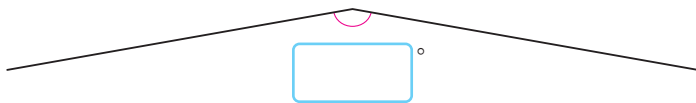
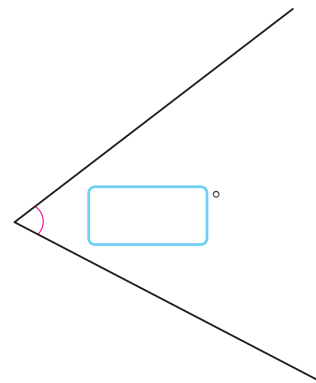
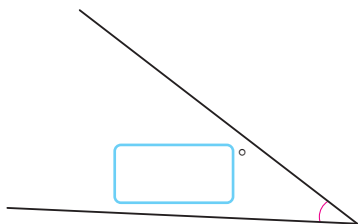
각의 크기는 얼마일까요

공부한 날 월 일

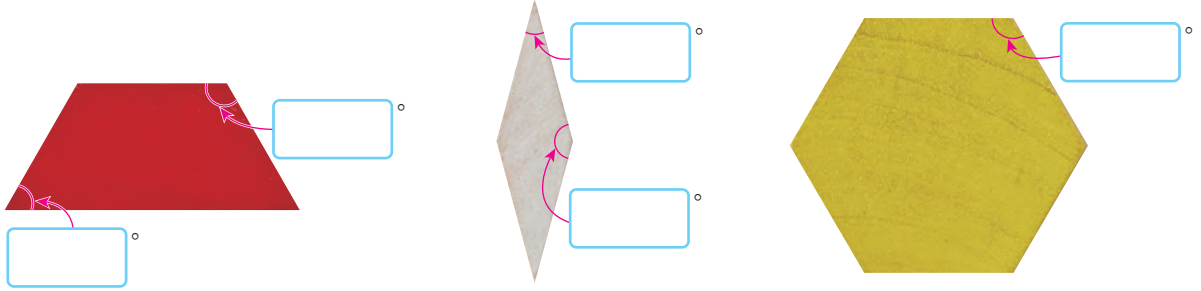
1 각도를 구해 보세요.


 °

 °

 °

 °

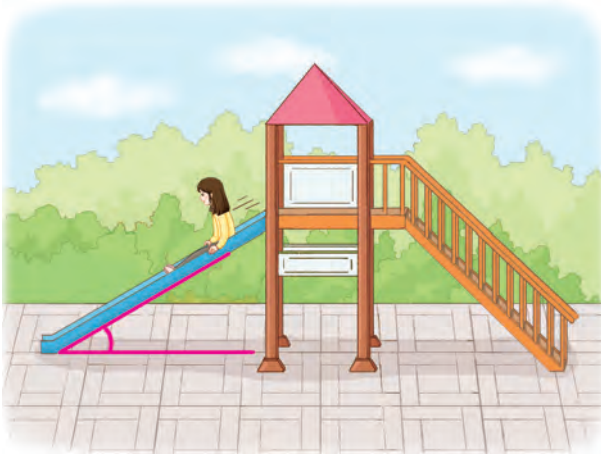
2 각도기를 이용하여 각도를 재어 보세요.


 °

 °

 °

3 각도기를 이용하여 여러 가지 도형의 각도를 재어 보세요.



4 각도기를 이용하여 우리 주변에서 볼 수 있는 각도를 재어 보세요.



°

깜짝문제

빈칸에 알맞은 수를 써넣으세요.

2250	2350	2450	2550
3250			3550
4250		4450	
	5350		



°

2

각도